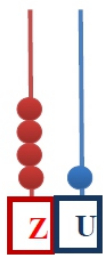


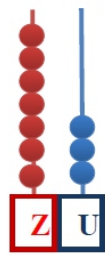




FIȘĂ DE LUCRU

Recapitulare - numerele naturale de la 0 la 100

1. Scrie numerele formate pe numărătoare sau reprezintă-le tu.

					
<input type="text"/>	<input type="text"/>	<input type="text" value="6"/> <input type="text" value="4"/>	<input type="text"/>	<input type="text"/>	<input type="text" value="4"/> <input type="text" value="3"/>

2. Descoperă regula, apoi continuă cu încă 3 numere.

- 51, 52, 53, , , ;
- 30, 32, 34, , , ;
- 60, 65, 70, , , .

3. Compară numerele date folosind semnele: <, >, =.

82 <input type="text"/> 28	23 <input type="text"/> 59	30 <input type="text"/> 40
53 <input type="text"/> 33	64 <input type="text"/> 64	89 <input type="text"/> 89
39 <input type="text"/> 31	70 <input type="text"/> 46	99 <input type="text"/> 71

4. Ordonează crescător numerele de mai jos.

25 9 62 43 16 85




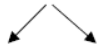
↗

5. Ordonează descrescător numerele de mai jos.

96 24 31 12 54 76

↘

6. Descompune numerele.

76	45	81	72
			
<input type="text"/> <input type="text"/> <input type="text"/> <input type="text"/>	<input type="text"/> <input type="text"/> <input type="text"/> <input type="text"/>	<input type="text"/> <input type="text"/> <input type="text"/> <input type="text"/>	<input type="text"/> <input type="text"/> <input type="text"/> <input type="text"/>

7. Încercuiește cu roșu numerele impare și cu albastru pe cele pare.

64 53 41 28 70 87

8. Scrie vecinii numerelor:

<input type="text"/> <input type="text"/>	20	<input type="text"/> <input type="text"/>	<input type="text"/> <input type="text"/>	31	<input type="text"/> <input type="text"/>	<input type="text"/> <input type="text"/>	19	<input type="text"/> <input type="text"/>
<input type="text"/> <input type="text"/>	64	<input type="text"/> <input type="text"/>	<input type="text"/> <input type="text"/>	79	<input type="text"/> <input type="text"/>	<input type="text"/> <input type="text"/>	47	<input type="text"/> <input type="text"/>
<input type="text"/> <input type="text"/>	49	<input type="text"/> <input type="text"/>	<input type="text"/> <input type="text"/>	83	<input type="text"/> <input type="text"/>	<input type="text"/> <input type="text"/>	55	<input type="text"/> <input type="text"/>